



EXAMINATIONS COUNCIL OF ESWATINI
Eswatini Prevocational Certificate of Secondary Education

CANDIDATE
NAME

CENTRE
NUMBER

--	--	--	--	--

CANDIDATE
NUMBER

--	--	--	--

FOOD AND TEXTILES TECHNOLOGY

5926/02

Paper 2 Structured Questions

October/November 2023

2 hours

Candidates answer on the Question paper

Total Marks: 100

READ THESE INSTRUCTIONS FIRST

Write your Centre number, candidate number and name on all the work you hand in.

Write in **blue or black ink** in the spaces provided on the question paper.

You may use a soft pencil for any diagram, graph or rough working.

Do **not** use staples, paper clips, highlighters, glue or correction fluid.

Section A – consists of short constructed responses worth **40** marks
Answer all questions in the spaces provided on the question paper.

Section B – consists of long and extended responses worth **60** marks
Answer all questions in the spaces provided on the question paper.

The number of marks is given in brackets [] at the end of each question or part question.

For Examiner's Use	
Question	Marks
Total Marks	

This document consists of **11** printed pages and **1** blank page.

SECTION A

This Section comprises Questions on Food and Textiles Technology.

Answer **all** questions in the spaces provided.

FOOD TECHNOLOGY

1 (a) State the importance of iron in the human body.

.....
..... [1]

(b) Fats provide the body with a concentrated source of energy. State **three** other functions of fat.

(i)
..... [1]

(ii)
..... [1]

(iii)
..... [1]

(c) State **one** symptom of a deficiency in Vitamin E.

..... [1]

(d) State **two** ways to keep bread fresh.

1
.....
2
..... [2]

(e) Explain the effect of oxidation on fruits and vegetables.

.....
.....
..... [2]

(f) Describe the steaming method of cooking

.....
.....
.....
.....
..... [3]

(g) Explain **two** points on the importance of labelling food preserves.

1
.....
2
..... [4]

(h) Explain **two** causes of each of the following faults in pastry making:

(i) Sogginess

.....
.....
.....
..... [2]

(ii) Hard or tough pastry.

.....
.....
.....
..... [2]

[TOTAL MARKS: 20]

TEXTILES TECHNOLOGY

2 (a) Which process in a skirt requires the use of diagonal tacking and why?

.....
..... [2]

(b) List **three** points to consider when choosing buttons to be used as a fastening.

1
2
3 [3]

(c) Suggest **three** points to consider when caring for a steam iron.

1
.....
2
.....
3
..... [3]

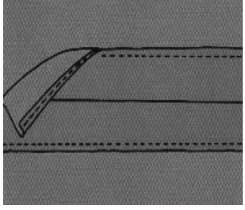

(d) Describe how to take the bust measurement.

.....
.....
.....
..... [3]

(e) Suggest **two** ways to ensure the economy in the use of water during textile production.

1
.....
2
..... [2]

(f) State the name of each seam finish shown in the table. State an example of a use for each.

Seam Finish	Name and Example of Use
i. 	Name: Use:
ii. 	Name: Use:

[4]

(g) State **three** fabric characteristics to be considered when choosing a seam.

- 1 [3]
- 2
- 3

[TOTAL MARKS: 20]

SECTION B

This section comprises **four** questions. Questions **3 & 4** are on Food Technology and questions **5 & 6** are on Textiles technology.

Answer **all** questions in the spaces provided

3 (a) Give **two** functions of shortening in flour mixtures.

1
.....
2
..... [2]

(b) State how to make royal icing thinner.

.....
.....
..... [1]

(c) Describe how to make a cake using the melting method.

.....
.....
.....
.....
.....
..... [3]

(d) Explain the function of whisked egg white when making a sponge cake.

.....
.....
.....
.....
..... [3]

4 (a) Give **two** symptoms of food poisoning.

1

.....

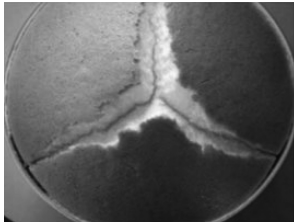


2

..... [2]

(b) State **one** function of flavouring agents in cake preparation.

..... [1]

(c) The table below illustrates faults in cake making. Identify each fault and give a possible cause for each.

Cake	Fault	Possible cause
i. 
ii. 
iii. 

[6]

(d) Explain the difference between a raglan and a set-in sleeve.

.....
.....
.....
..... [2]

(e) Evaluate a well-made lapped zipper.

.....
.....
.....
.....
.....
.....
.....
.....
.....
.....
.....
.....
.....
.....
.....
.....
.....
.....
.....
.....
..... [6]

[TOTAL MARKS: 15]

6 (a) Explain the use of the following:

(i) Wool for a winter jacket.

.....
.....
..... [2]

(ii) French seam on toddler's garment.

.....
.....
..... [2]

(b) Explain how to enlarge the width of a set in sleeve pattern.

.....
.....
.....
.....
.....
.....
.....
.....
.....
.....
..... [5]

(c) Evaluate a well-made patch pocket.

.....
.....
.....
.....
.....
.....
.....
.....
.....
.....
.....
.....
.....
.....
.....
.....
.....
.....
..... [6]

[TOTAL MARKS: 15]

